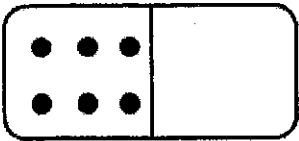
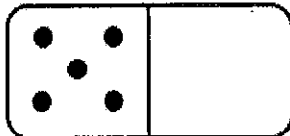
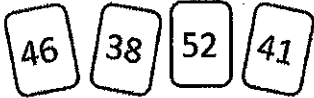
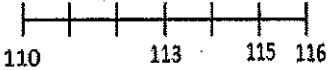

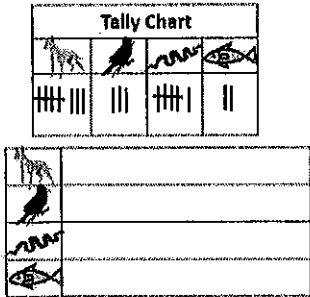








Monday	Tuesday	Wednesday	Thursday
<p>Draw enough dots to make 10.</p> 	<p>What two numbers make 10?</p> <p>4 + _____</p>	<p>Draw enough dots to make 10.</p> 	<p>What two numbers make 10?</p> <p>_____ + 7</p>
<p>Add the numbers.</p> <p>7 + 1 = _____</p>	<p>Cassie got 3 scoops of ice cream. Ben got 2 scoops. How many scoops of ice cream did they get in all?</p> <p>_____ + _____ = _____</p>	<p>Subtract the numbers.</p> <p>8 - 5 = _____</p>	<p>Victor earned 7 dollars. Jacob earned 3 dollars. How much more did Victor earn than Jacob?</p> <p>_____ - _____ = _____</p>
<p>Put the number cards in order from least to greatest.</p>  <p>_____</p>	<p>Fill in the missing numbers on the number line.</p> 	<p>Put the number cards in order from greatest to least.</p>  <p>_____</p>	<p>Fill in the missing numbers.</p> <p>_____, _____, 101, 102</p> <p>114, 115, _____, _____, _____</p>
<p>Use the chart to create a bar graph.</p>  <p>😊 = 1 person</p>	<p>How many fewer people like dogs than birds?</p>	<p>How many more people like snakes than fish?</p>	<p>Which animal has the fewest votes?</p>
<p>Which shape doesn't belong?</p> 	<p>Draw the letter T using two rectangles.</p>	<p>How are the two shapes alike?</p> 	<p>Cut the shape into 3 shapes.</p> 
<p>Cut the shape into halves.</p> 	<p>Cut the shape into halves.</p> 	<p>Cut the shape into fourths.</p> 	<p>Cut the shape into fourths.</p> 