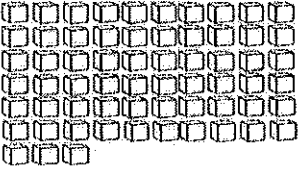

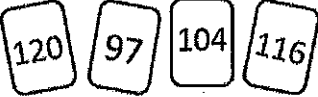
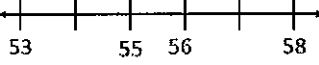

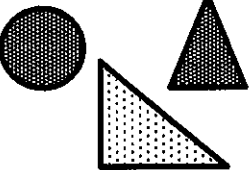










Name: _____

Date: **11/23-11/27**

Monday	Tuesday	Wednesday	Thursday
<p>How many tens? _____ How many ones? _____</p>  <p>How many? _____</p>	<p>What two numbers make 10?</p> <p>0 + _____</p>	<p>How many tens? _____ How many ones? _____</p>  <p>How many? _____</p>	<p>What two numbers make 10?</p> <p>_____ + 4</p>
<p>Add the numbers.</p> <p>7 + 1 = _____</p>	<p>On Jasmine's ice cream, there are 3 gummy bears, and 6 gummy worms. How many pieces of candy does she have?</p> <p>_____ + _____ = _____</p>	<p>Subtract the numbers.</p> <p>9 - 7 = _____</p>	<p>Jasmine has 3 scoops of ice cream. 1 scoop melts and falls on the floor. How many scoops does Jasmine have left?</p> <p>_____ - _____ = _____</p>
<p>Put the number cards in order from least to greatest.</p>  <p>_____</p>	<p>Fill in the missing numbers on the number line.</p> 	<p>Put the number cards in order from greatest to least.</p>  <p>_____</p>	<p>Fill in the missing numbers.</p> <p>77, 78, _____, _____</p> <p>83, 84, _____, _____</p>
<p>Which shape doesn't belong?</p> 	<p>Complete the pattern.</p> 	<p>Draw a triangle. How many sides? How many corners?</p> <p>Sides _____ Corners _____</p>	<p>Cut the circles into fourths.</p> 
<p>Which one is taller?</p> <p>A house</p> <p>OR</p> <p>A car</p>	<p>Circle the shortest pencil.</p> 	<p>Circle the longest pencil.</p> 	<p>Order the pencils from longest to shortest.</p> 
<p>Draw a line that is five cubes long.</p> 	<p>Which flower is 7 cubes tall?</p> 	<p>Which piece of ribbon is 5 cubes long?</p> 	<p>Which piece of ribbon is 6 blocks long?</p> 