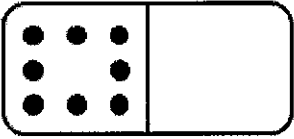
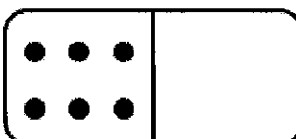
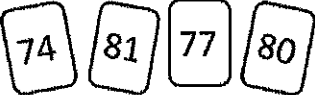
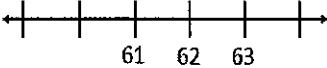
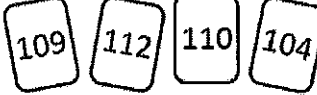



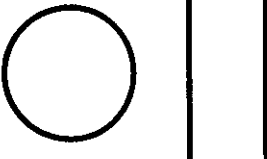

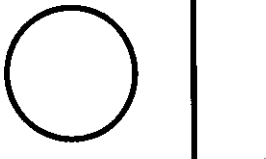




Name: _____

My Math Homework - 1

Date: **11/2-11/6**

Monday	Tuesday	Wednesday	Thursday
Draw enough dots to make 10. 	What two numbers make 10? $9 + \underline{\quad}$	Draw enough dots to make 10. 	What two numbers make 10? $\underline{\quad} + 2$
Add the numbers. $5 + 4 = \underline{\quad}$	Emily picked some flowers for her mom. She picked 5 white flowers, and 3 pink flowers. How many flowers did she pick? $\underline{\quad} + \underline{\quad} = \underline{\quad}$	Subtract the numbers. $10 - 4 = \underline{\quad}$	At Victoria's birthday, she had 8 blue balloons. By the end of the party, 3 balloons popped. How many balloons were left? $\underline{\quad} - \underline{\quad} = \underline{\quad}$
Put the number cards in order from least to greatest.  _____	Fill in the missing numbers on the number line. 	Put the number cards in order from greatest to least.  _____	Fill in the missing numbers. 98, 99, _____, _____, _____ _____, _____, 121, 122
Which shape doesn't belong? 	Draw a shape using a triangle and a rectangle.	How are the two shapes different? 	Cut the shape into 2 shapes. 
Cut the shapes into 2 equal pieces. 	You and your friend want to share the cookie. How will you cut the cookie? 	Cut the shapes into 4 equal pieces. 	You and your 3 friends want to share the candy bar. How will you cut it? 
Name 1 thing that is... Smaller than your hand. Bigger than your hand.	Circle which one is longer. Your backpack OR Your bed	Draw a line that is shorter than the pencil. Start at the dot. 	Draw a line that is longer than the pencil. Start at the dot. 