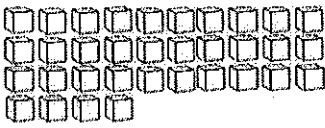

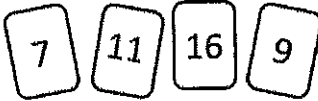
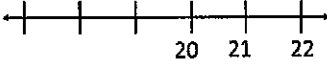











Name: \_\_\_\_\_

Date: **11/16 - 11/20**

Monday	Tuesday	Wednesday	Thursday
<p>How many tens? ____ How many ones? ____</p>  <p>How many? _____</p>	<p>What two numbers make 10?</p> <p>3 + ____</p>	<p>How many tens? ____ How many ones? ____</p>  <p>How many? _____</p>	<p>What two numbers make 10?</p> <p>____ + 8</p>
<p>Add the numbers.</p> <p>2 + 5 = ____</p>	<p>Kelly slid down the slide at the park 5 times. Jamie slid down 4 times. How many times did they slide altogether?</p> <p>____ + ____ = ____</p>	<p>Subtract the numbers.</p> <p>7 - 4 = ____</p>	<p>Grace drew 4 rectangles. Then she erased 3 of them. How many rectangles are on her paper?</p> <p>____ - ____ = ____</p>
<p>Put the number cards in order from least to greatest.</p>  <p>_____</p>	<p>Fill in the missing numbers on the number line.</p> 	<p>Put the number cards in order from greatest to least.</p>  <p>_____</p>	<p>Fill in the missing numbers.</p> <p>28, ____, ____, 31, 32</p> <p>____, ____, 45, ____</p>
<p>Which shape doesn't belong?</p> 	<p>Draw a shape with 2 long sides, 2 short sides, and cut it into 4 equal parts.</p>	<p>Draw a hexagon. How many sides? How many corners?</p> <p>Sides ____ Corners ____</p>	<p>Cut the rectangles into fourths.</p> 
<p>Who is taller?</p> <p>You</p> <p>OR</p> <p>Your teacher</p>	<p>Circle the shortest block.</p> 	<p>Circle the tallest girl.</p> 	<p>Order the bananas from shortest to longest.</p> 
<p>About how many paperclips long is the pencil?</p> 	<p>How many paperclips long is the eraser?</p> 	<p>How many cubes tall is the boy?</p> 	<p>How many cubes tall is the dog?</p> 